



Timester Challenge

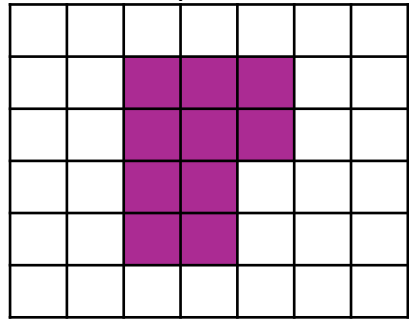
Area and Perimeter




The perimeter is the _____ of a shape.

The area is the _____ of a shape.

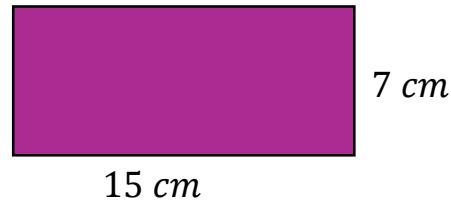
Calculate the perimeter of the shaded shape.



 = 1cm^2

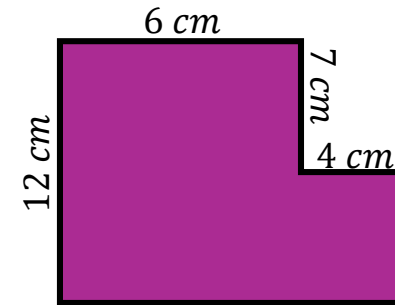
Bronze 

Calculate the perimeter of the shape.



Silver 

Calculate the perimeter and area of this rectilinear shape.

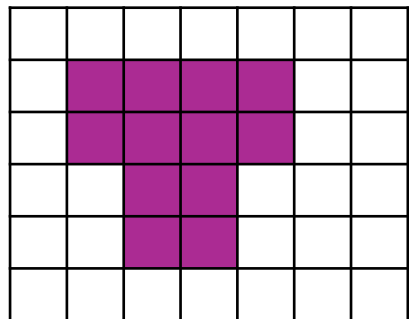



Perimeter: _____

Area: _____

Gold 

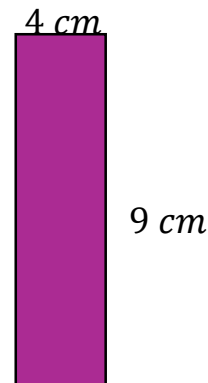
Calculate the area of the shaded shape.



 = 1cm^2

Bronze 

Calculate the area of the shape.



Silver 