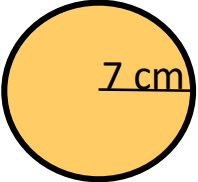
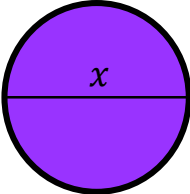
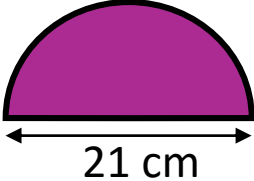
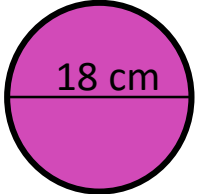
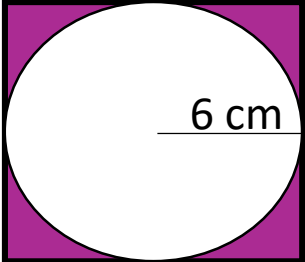
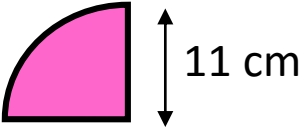




Timester Challenge



Circles

<p>Calculate the circumference</p>  <p>Bronze ★</p>	<p>Find the Diameter Circumference = 39.25cm</p>  <p>Silver ★</p>	<p>Find the Perimeter</p>  <p>Gold ★</p>
<p>Calculate the area</p>  <p>Bronze ★</p>	<p>A circle of radius 6 cm is inscribed inside a square. Find the size of the shaded area.</p>  <p>Silver ★</p>	<p>Find the Area</p>  <p>Gold ★</p>