



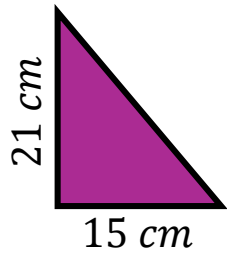
Timester Challenge

Pythagoras' Theorem



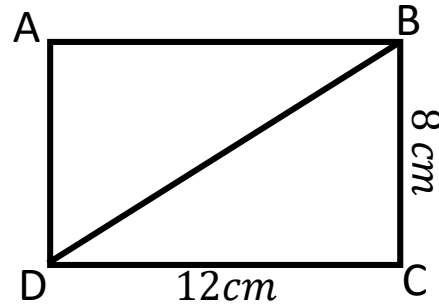
Pythagoras' theorem states that _____ + _____ = _____

Calculate the missing length.



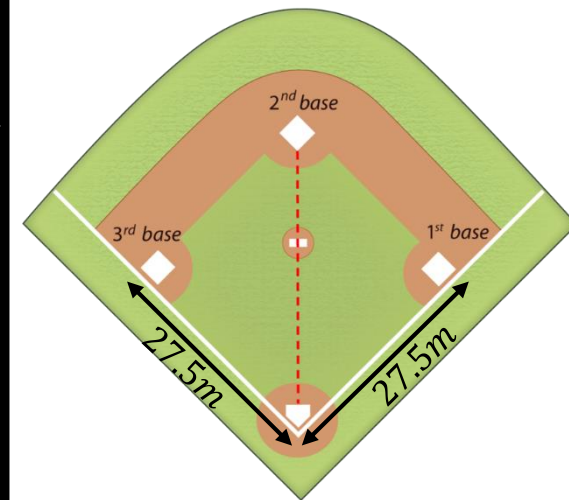
Bronze ★

Calculate the length of the line DB.



Silver ★

Calculate the shortest distance from the home plate to 2nd base on a rounder's pitch. When the base plates are set up in a square formation.

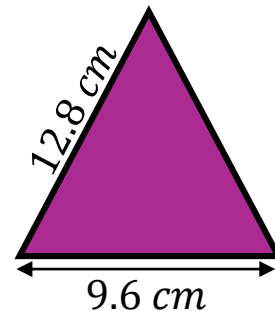


Calculate the missing length.



Bronze ★

Calculate the area of the triangle.



Silver ★

Gold ★