

Perimeter

Literacy

The vowels have been stolen. Can you save the day and discover what these mathematical words are?

Sm

Prmtr

dd

tsd

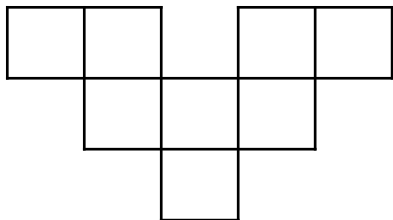
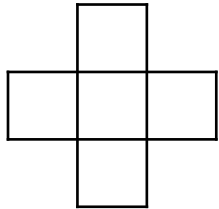
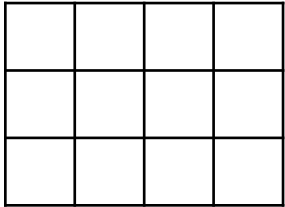
dgs

cnt



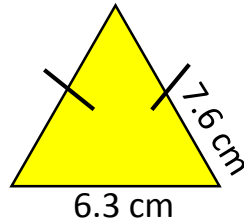
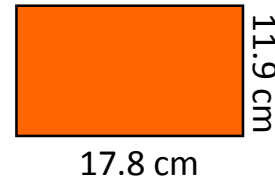

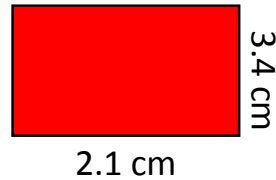
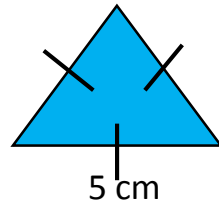
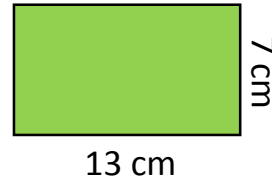
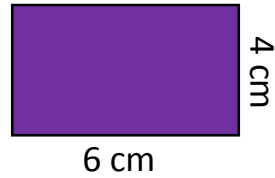
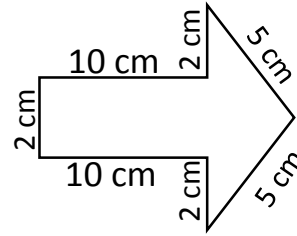
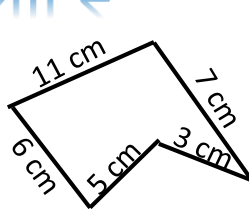
Skill 1

Find the perimeter of these shapes.



Skill 2

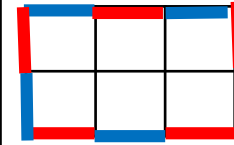
Find the perimeter of these shapes.



www.missbsresources.com

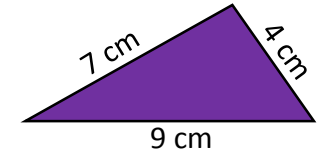
Memory

Perimeter is the distance around the outside of a shape



Count the outside edges highlighted in blue and red.

Perimeter = 10cm



Add all the edges together.

Perimeter = 4+7+9 = 20cm

Stretch 1

Find the perimeter of these shapes.

