

Quick Wits 8 - foundation

1*. Carmen sees the same model of computer for sale in two different shops? Which shop sells it more cheaply?

Computers-R-Us



25% off

Normal price £440

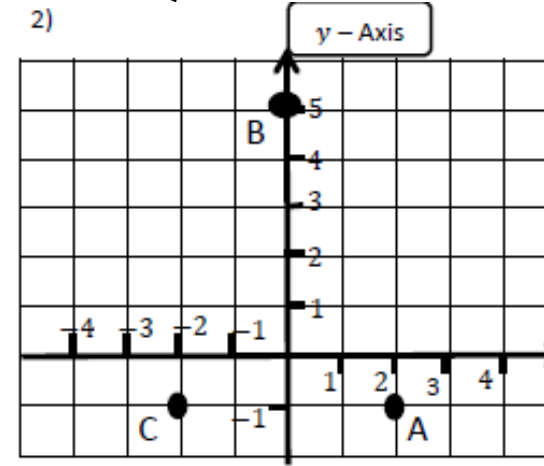
PC World



$\frac{2}{5}$ off

Normal price £550

2)



Name the co-ordinates of

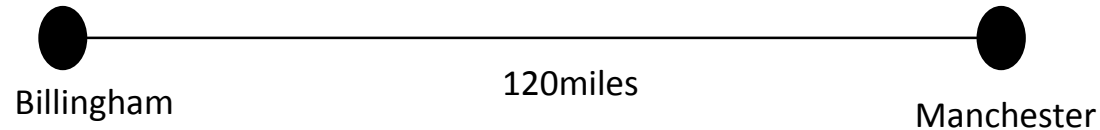
a) Point A (__, __)

b) Point B (__, __)

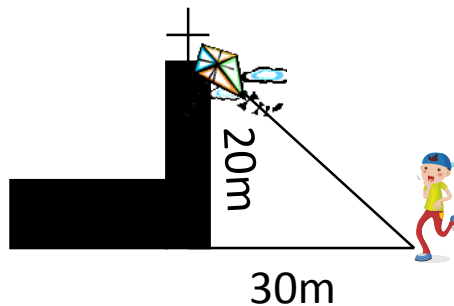
c) Point C (__, __)

d) The points ABC make a shape name the shape and connect the sides.

4*) There is 120 miles between Manchester and Billingham. Scotch corner is $\frac{1}{4}$ of the distance from Billingham.



3*. James kite got caught on a church steeple, What size ladder will he need?



a) How many miles is it from Billingham to Scotch corner?

b) Miss Bartram and Mrs Taylor are going on a road trip. They start Billingham and go to Manchester. However on the way home Miss B drops Mrs T off at scotch corner and Miss B goes back to Billingham alone.

a) How many miles did Miss B travel.

b) How many miles did Mrs T Travel