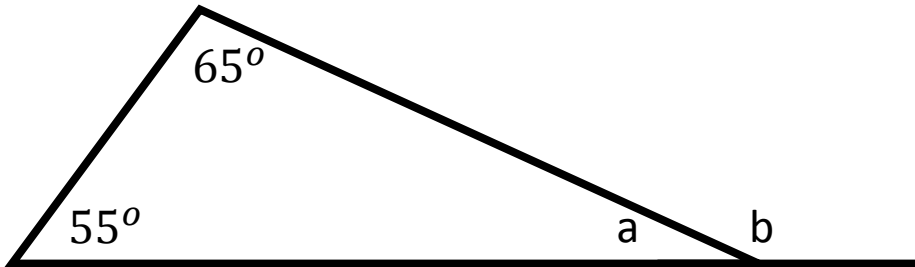


## Quick Wits –Foundation 13

1) Share £30 in the ratio 2:3


2)  $\frac{3}{5}$  of £40

3) What are the missing angles?



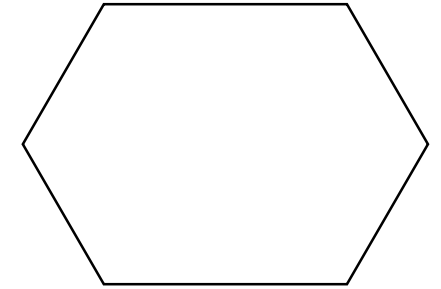
4) Wages increase by 15%. If minimum wage was £6 how much is it now?

5) a) Name the shape



b) Identify 3 properties of this shape.

6) a) Name the shape.



b) What is the sum of the interior angles.

7) Solve  $5x + 16 = 3x + 42$