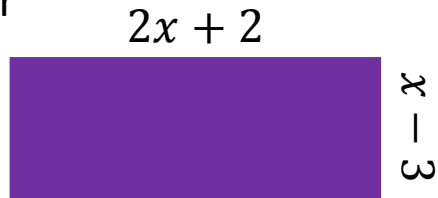


Quick Wits – Higher 15

1) Expand and Simplify
 $3(2x + 1) + 4(3x - 3)$

2) Write an expression for

a) Area

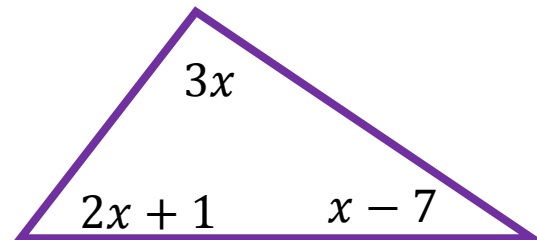


b) Perimeter.

3) Factorise the expression

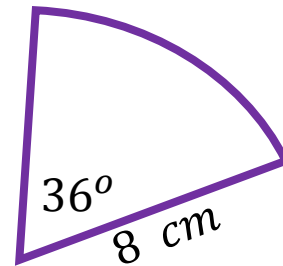
$$8xt + 20xy - 16x^2$$

4) Calculate the value of x



4) Calculate the value for the graph $y = x^2 + 2x$

x	-3	-2	-1	0	1	2
y						



5) a) What fraction of a full circle is the sector? (Use angles)

b) Find the area of the sector.

c) What is the length of the arc?